


NUMBER NINJAS OLYMPIADS

Grade 1-2

Instructions:

- Total Questions: **30**
- Time Allowed: **60 Minutes**
- Choose the correct option (**A, B, C, or D**)
- Each question carries **1 mark**

Q1	Which number is less than 5?
A 4	B 3
C 6	D 5


Q2	Count the dots. What number comes next?	
A 4	B 6	
C 7	D 5	

Q3	If you have two apples and your mom gives you another apple, how many apples do you have?
A 3	B 4
C 5	D 6

Q4	Use the number chart to answer the question.										
Which numbers count forward?	<table border="1" style="display: inline-table;"> <tr> <td>1</td><td>2</td><td>3</td><td>4</td><td>5</td><td>6</td><td>7</td><td>8</td><td>9</td><td>10</td> </tr> </table>	1	2	3	4	5	6	7	8	9	10
1	2	3	4	5	6	7	8	9	10		
A 3, 4, 5	B 5, 4, 3										
C 6, 7, 8	D A and C										

NUMBER NINJAS OLYMPIADS

Grade 1-2

Q5	Name this shape: 
A Sphere	B square
C Circle	D rectangle

Q6	Which Number is greater than 12?
A 13	B 14
C 15	D All of these

Q7	What is $3 + 4$?
A 3	B 4
C 7	D 34

Q8	Ali wake up at 7:00AM and take 40 min to get ready for school. What time is it now?
A 7:00AM	B 7:20AM
C 7:30AM	D 7:40AM

Q9	I see five stars? Show me the number five?
A 55	B 5
C 555	D 5555

NUMBER NINJAS OLYMPIADS

Grade 1-2

Q10

There were 10 cups? 4 had milk in them? The rest did not. How many cups did not have milk?

A 2

B 4

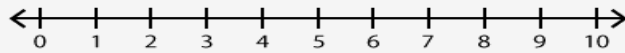
C 6

D 10

Q11

There were 6 kids on the bus? Then the bus driver picked up 3 more kids? How many kids are on the bus now?

Use the number line to solve the problem.



A 10

B 7

C 4

D 9

Q12

$10+100?$

A 101

B 110

C 11000

D 10100

Q13

Are there more boys or girls?



A Boys

B Girls

C Equal

D Cannot define

Q14

$2 \times 8 = ?$

A 8

B 2

C 16

D 28

NUMBER NINJAS OLYMPIADS

Grade 1-2

Q15 True or False? $3 + 6 = 8$

A False

B True

C A and B

D None

Q16 What is the result of adding 34 and 28?

A 60

B 61

C 62

D 63

Q17 If you subtract 17 from 42, what is the result?

A 24

B 25

C 26

D 27

Q18 Which of the following numbers is the largest?

A 91

B 81

C 98

D 99

Q19 Which number comes next in the pattern: 5, 10, 15, 20?

A 10

B 15

C 20

D 25

NUMBER NINJAS OLYMPIADS

Grade 1-2

Q20

Which of the following shapes has four sides of equal length?

A



B



C



D



Q21

If today is Tuesday, what day will it be after 2 days?

A Thursday

B Friday

C Saturday

D Sunday

Q22

How many sides does a hexagon have?

A 6

B 7

C 8

D 9

Q23

How many minutes are there in 1 hour?

A 12

B 24

C 60

D 70

Q24

If A is standing to the left of B, and B is standing to the left of C, who is in the middle?

A A

B B

C C

D D

Q25

How many days are there in the month of February during a leap year?

NUMBER NINJAS OLYMPIADS

Grade 1-2

A 28	B 29
C 30	D 33

Q26 Which of the following coins is worth more than a 50 paisa coin?

A 10 paisa	B 20 paisa
C 30 rupees	D 33 rupees

Q27 Look at the clock. If the small hand is pointing to 4 and the big hand is pointing to 9, what time is it?



A 4:45	B 2:45
C 4:09	D 4:00

Q28 Sara has 10 notebooks and 5 books. Altogether she have notebooks?

A 15	B 20
C 10	D 5

Q29 Which one representing descending order?

A 2, 4, 6	B 6, 7, 8
C 8, 6, 7	D 7, 6, 5

Q30 Which Statement is true

A $7 > 7$	B $7 = 7$
C $7 < 7$	D None of these